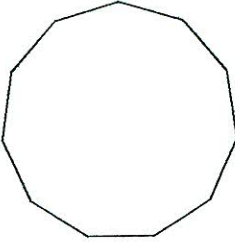


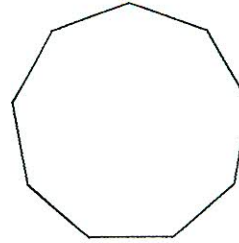
Assignment

Find the measure of one exterior angle in each polygon. Round your answer to the nearest tenth if necessary.


1)



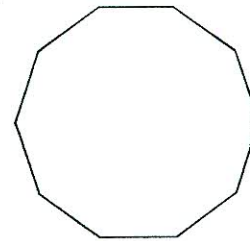
2)



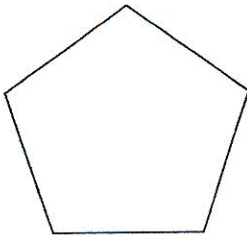
3)



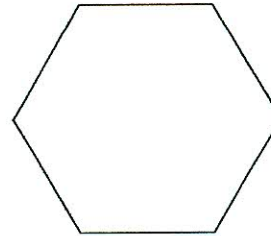
4)



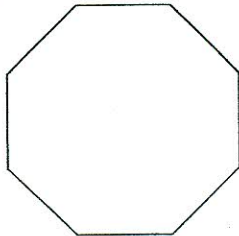
5)



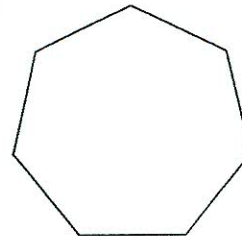
6)



7)



8)



Find the interior angle sum AND one angle for each polygon. Round your answer to the nearest tenth if necessary.

9) regular 19-gon

10) regular 11-gon

11) regular 14-gon

12) regular 16-gon

13) regular 15-gon

14) regular octagon

15) regular 22-gon

16) regular 21-gon

17) regular 17-gon

18) regular nonagon

19) regular 18-gon

20) regular 20-gon

21) regular 25-gon

22) regular hexagon

